

DP IB Maths: AA HL



Your notes

5.1 Differentiation

Contents

- * 5.1.1 Introduction to Differentiation
- * 5.1.2 Applications of Differentiation



Your notes

5.1.1 Introduction to Differentiation

Introduction to Derivatives

- Before introducing a **derivative**, an understanding of a **limit** is helpful

What is a limit?

- The **limit** of a **function** is the value a function (of X) approaches as X approaches a particular value from either side
 - Limits are of interest when the function is undefined at a particular value
 - For example, the function $f(x) = \frac{x^4 - 1}{x - 1}$ will approach a limit as X approaches 1 from both below and above but is undefined at $X = 1$ as this would involve dividing by zero

What might I be asked about limits?

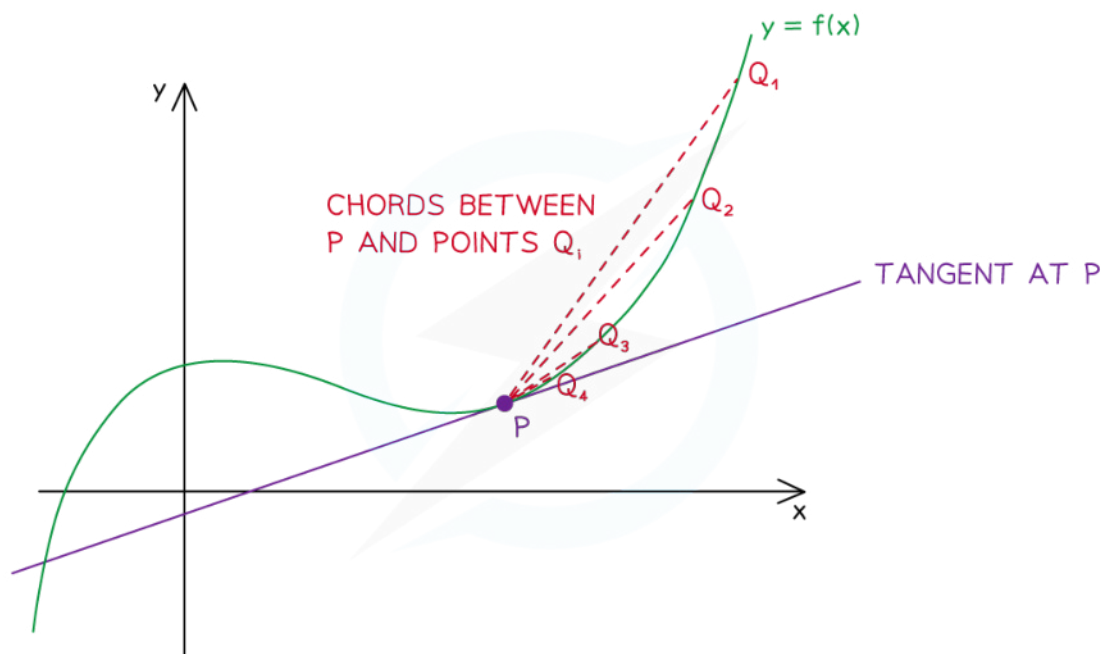
- You may be asked to predict or estimate limits from a table of function values or from the graph of $y = f(x)$
- You may be asked to use your GDC to plot the graph and use values from it to estimate a limit

What is a derivative?

- Calculus** is about **rates of change**
 - the way a car's position on a road changes is its speed (velocity)
 - the way the car's speed changes is its acceleration
- The **gradient** (rate of change) of a (non-linear) **function** varies with X
- The **derivative** of a function is a function that relates the **gradient** to the value of X
- The derivative is also called the **gradient function**

How are limits and derivatives linked?

- Consider the point P on the graph of $y = f(x)$ as shown below
 - $[PQ_i]$ is a series of chords



Copyright © Save My Exams. All Rights Reserved

- The **gradient** of the **function** $f(x)$ at the point P is **equal** to the **gradient** of the **tangent** at point P
- The **gradient** of the **tangent** at point P is the **limit** of the **gradient** of the chords $[PQ_i]$ as point Q 'slides' down the curve and gets ever closer to point P
- The **gradient** of the function changes as X changes
- The **derivative** is the function that calculates the gradient from the value X

What is the notation for derivatives?

- For the function $y = f(x)$, the **derivative**, with respect to x , would be written as

$$\frac{dy}{dx} = f'(x)$$

- Different variables may be used
 - e.g. If $V = f(s)$ then $\frac{dV}{ds} = f'(s)$



Your notes

Worked example

The graph of $y = f(x)$ where $f(x) = x^3 - 2$ passes through the points $P(2, 6)$, $A(2.3, 10.167)$, $B(2.1, 7.261)$ and $C(2.05, 6.615125)$.

- a) Find the gradient of the chords $[PA]$, $[PB]$ and $[PC]$.

Gradient of a line (chord) is " $\frac{y_2 - y_1}{x_2 - x_1}$ "

$$[PA]: \frac{10.167 - 6}{2.3 - 2} = 13.89$$

$$[PB]: \frac{7.261 - 6}{2.1 - 2} = 12.61$$

$$[PC]: \frac{6.615125 - 6}{2.05 - 2} = 12.3$$

Gradient of chords are:

- $[PA]$ 13.89
- $[PB]$ 12.61
- $[PC]$ 12.3025

- b) Estimate the gradient of the tangent to the curve at the point P .

There will be a limit the gradient of the chord reaches as the difference in the x -coordinates approaches zero.

Estimate of gradient of tangent at $x = 2$ is 12



Your notes

Differentiating Powers of x

What is differentiation?

- **Differentiation** is the process of finding an expression of the **derivative (gradient function)** from the expression of a function

How do I differentiate powers of x?

- **Powers of X** are **differentiated** according to the following formula:
 - If $f(x) = x^n$ then $f'(x) = nx^{n-1}$ where $n \in \mathbb{Q}$
 - This is given in the **formula booklet**
- If the power of X is **multiplied** by a **constant** then the derivative is also multiplied by that constant
 - If $f(x) = ax^n$ then $f'(x) = anx^{n-1}$ where $n \in \mathbb{Q}$ and a is a constant
- The **alternative notation** (to $f'(x)$) is to use $\frac{dy}{dx}$
 - If $y = ax^n$ then $\frac{dy}{dx} = anx^{n-1}$
 - e.g. If $y = -4x^{\frac{1}{2}}$ then $\frac{dy}{dx} = -4 \times \frac{1}{2} \times x^{\frac{1}{2}-1} = -2x^{-\frac{1}{2}}$
- Don't forget these **two** special cases:
 - If $f(x) = ax$ then $f'(x) = a$
 - e.g. If $y = 6x$ then $\frac{dy}{dx} = 6$
 - If $f(x) = a$ then $f'(x) = 0$
 - e.g. If $y = 5$ then $\frac{dy}{dx} = 0$
- These allow you to differentiate **linear terms** in X and **constants**
- Functions involving **roots** will need to be rewritten as **fractional powers** of X first
 - e.g. If $f(x) = 2\sqrt{x}$ then rewrite as $f(x) = 2x^{\frac{1}{2}}$ and differentiate
- Functions involving **fractions** with **denominators** in terms of X will need to be rewritten as **negative powers** of X first
 - e.g. If $f(x) = \frac{4}{x}$ then rewrite as $f(x) = 4x^{-1}$ and differentiate

How do I differentiate sums and differences of powers of x?

- The formulae for differentiating powers of X apply to **all rational** powers so it is possible to differentiate any expression that is a **sum** or **difference** of **powers** of X

- e.g. If $f(x) = 5x^4 - 3x^{\frac{2}{3}} + 4$ then

$$f'(x) = 5 \times 4x^{4-1} - 3 \times \frac{2}{3}x^{\frac{2}{3}-1} + 0$$

$$f'(x) = 20x^3 - 2x^{-\frac{1}{3}}$$

- **Products** and **quotients** **cannot** be differentiated in this way so would need **expanding/simplifying** first
 - e.g. If $f(x) = (2x - 3)(x^2 - 4)$ then expand to $f(x) = 2x^3 - 3x^2 - 8x + 12$ which is a **sum/difference** of powers of X and can be differentiated

Examiner Tip

- A common mistake is not simplifying expressions before differentiating
 - The derivative of $(x^2 + 3)(x^3 - 2x + 1)$ can **not** be found by multiplying the derivatives of $(x^2 + 3)$ and $(x^3 - 2x + 1)$



Your notes



Your notes

Worked example

The function $f(x)$ is given by

$$f(x) = 2x^3 + \frac{4}{\sqrt{x}}, \text{ where } x > 0$$

Find the derivative of $f(x)$

Rewrite $f(x)$ so every term is a power of x

$$f(x) = 2x^3 + 4x^{-\frac{1}{2}}$$

Differentiate by applying the formula

$$f'(x) = 6x^2 - 2x^{-\frac{3}{2}}$$

$ax^n \rightarrow$

take care with negatives
 $-\frac{1}{2} - 1 = -\frac{3}{2}$

$$\therefore f'(x) = 6x^2 - 2x^{-\frac{3}{2}}$$

5.1.2 Applications of Differentiation



Your notes

Finding Gradients

How do I find the gradient of a curve at a point?

- The **gradient of a curve** at a point is the **gradient of the tangent** to the curve at that point
- **Find the gradient** of a curve at a point by **substituting the value of x** at that point into the curve's **derivative function**
- For example, if $f(x) = x^2 + 3x - 4$
 - then $f'(x) = 2x + 3$
 - and the gradient of $y = f(x)$ when $x = 1$ is $f'(1) = 2(1) + 3 = 5$
 - and the gradient of $y = f(x)$ when $x = -2$ is $f'(-2) = 2(-2) + 3 = -1$
- Although your GDC won't find a derivative function for you, it is possible to use your **GDC to evaluate**

the derivative of a function at a point, using $\frac{d}{dx}(\square)_{x=\square}$



Your notes

Worked example

A function is defined by $f(x) = x^3 + 6x^2 + 5x - 12$.

(a) Find $f'(x)$.

Find $f'(x)$ by differentiating

$$f'(x) = 3x^2 + 2 \times 6x^1 + 5x^0$$

$$f'(x) = 3x^2 + 12x + 5$$

(b) Hence show that the gradient of $y = f(x)$ when $x = 1$ is 20.

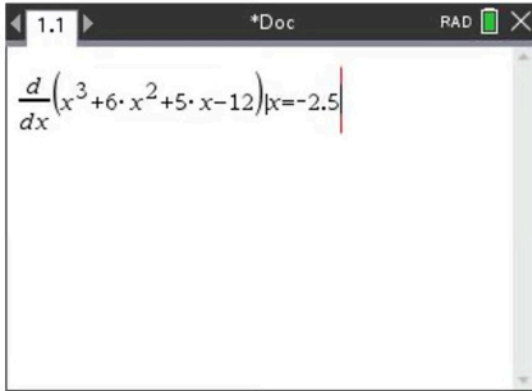
Substitute $x = 1$ into $f'(x)$

$$\begin{aligned} f'(1) &= 3(1)^2 + 12(1) + 5 \\ &= 3 + 12 + 5 \end{aligned}$$

$$f'(1) = 20$$

(c) Find the gradient of $y = f(x)$ when $x = -2.5$.

Use the GDC to evaluate the derivative of $f(x)$ at $x = -2.5$



A screenshot of a calculator window titled '*Doc' with 'RAD' mode selected. The display shows the derivative of the function $f(x) = x^3 + 6x^2 + 5x - 12$ evaluated at $x = -2.5$. The expression is $\frac{d}{dx}(x^3 + 6 \cdot x^2 + 5 \cdot x - 12)|_{x=-2.5}$.

$$f'(-2.5) = -6.25$$



Your notes

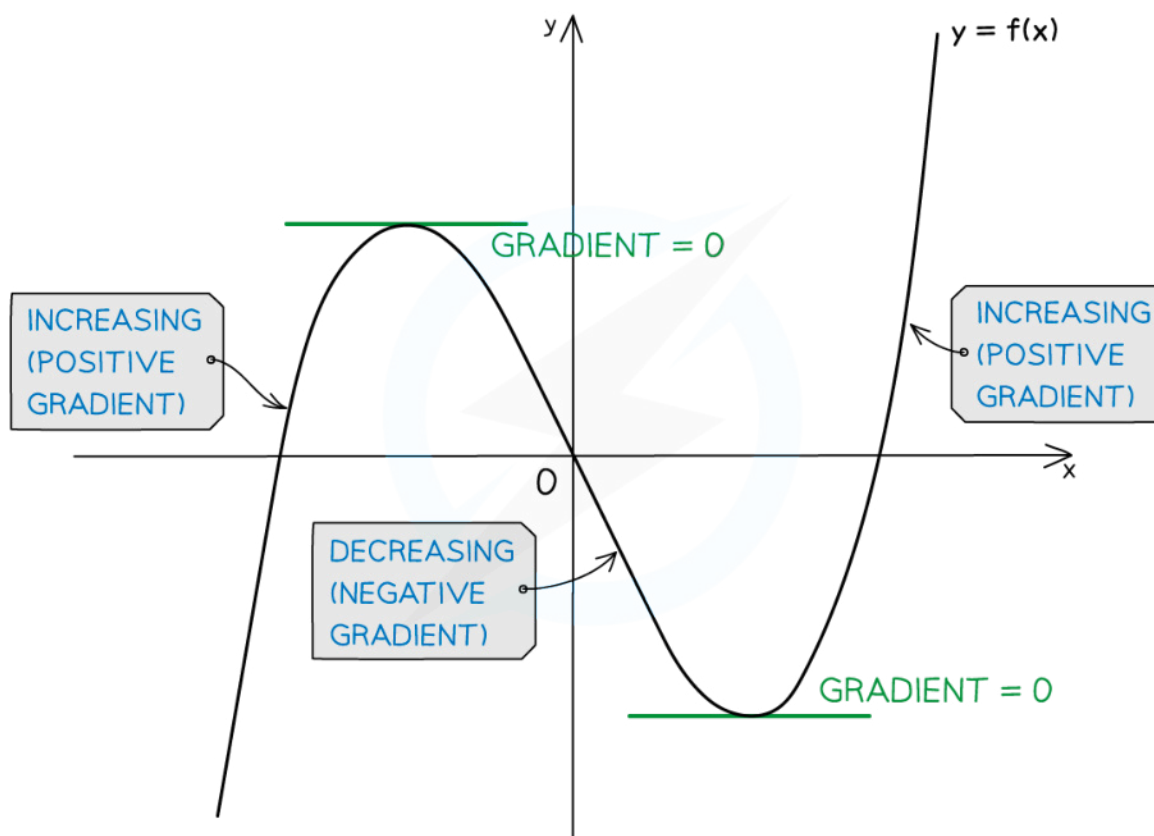


Your notes

Increasing & Decreasing Functions

What are increasing and decreasing functions?

- A function, $f(x)$, is **increasing** if $f'(x) > 0$
 - This means the **value** of the **function** ('output') **increases** as X **increases**
- A function, $f(x)$, is **decreasing** if $f'(x) < 0$
 - This means the **value** of the **function** ('output') **decreases** as X **increases**
- A function, $f(x)$, is **stationary** if $f'(x) = 0$



Copyright © Save My Exams. All Rights Reserved

How do I find where functions are increasing, decreasing or stationary?

- To identify the **intervals** on which a function is increasing or decreasing

STEP 1

Find the derivative $f'(x)$

STEP 2

Solve the inequalities

$f'(x) > 0$ (for increasing intervals) and/or

$f'(x) < 0$ (for decreasing intervals)

- Most functions are a combination of **increasing**, **decreasing** and **stationary**
 - a range of values of x (**interval**) is given where a function satisfies each condition
 - e.g. The function $f(x) = x^2$ has **derivative** $f'(x) = 2x$ so
 - $f(x)$ is **decreasing** for $x < 0$
 - $f(x)$ is **stationary** at $x = 0$
 - $f(x)$ is **increasing** for $x > 0$



Your notes



Your notes

 **Worked example**

$$f(x) = x^2 - x - 2$$

- a) Determine whether $f(x)$ is increasing or decreasing at the points where $x = 0$ and $x = 3$.

Differentiate

$$f'(x) = 2x - 1$$

$$\text{At } x = 0, f'(0) = 2 \times 0 - 1 = -1 < 0 \quad \therefore \text{decreasing}$$

$$\text{At } x = 3, f'(3) = 2 \times 3 - 1 = 5 > 0 \quad \therefore \text{increasing}$$

\therefore At $x = 0$, $f(x)$ is decreasing

At $x = 3$, $f(x)$ is increasing

- b) Find the values of x for which $f(x)$ is an increasing function.

$f(x)$ is increasing when $f'(x) > 0$

$$f'(x) > 0$$

$$2x - 1 > 0$$

$$x > \frac{1}{2}$$

$\therefore f(x)$ is increasing for $x > \frac{1}{2}$

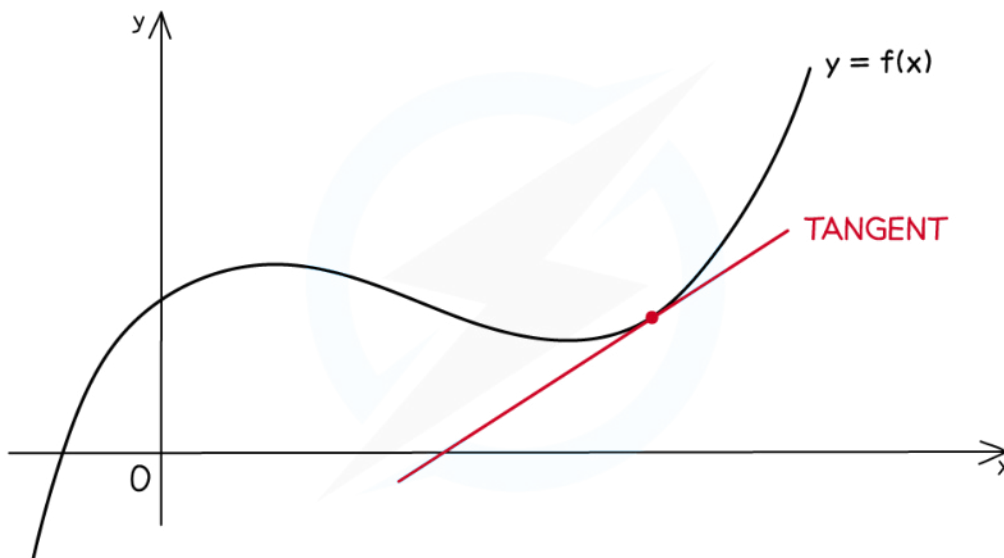


Your notes

Tangents & Normals

What is a tangent?

- At any point on the graph of a (non-linear) **function**, the **tangent** is the straight line that **touches** the graph at a point **without crossing** through it
- Its **gradient** is given by the **derivative function**



Copyright © Save My Exams. All Rights Reserved

How do I find the equation of a tangent?

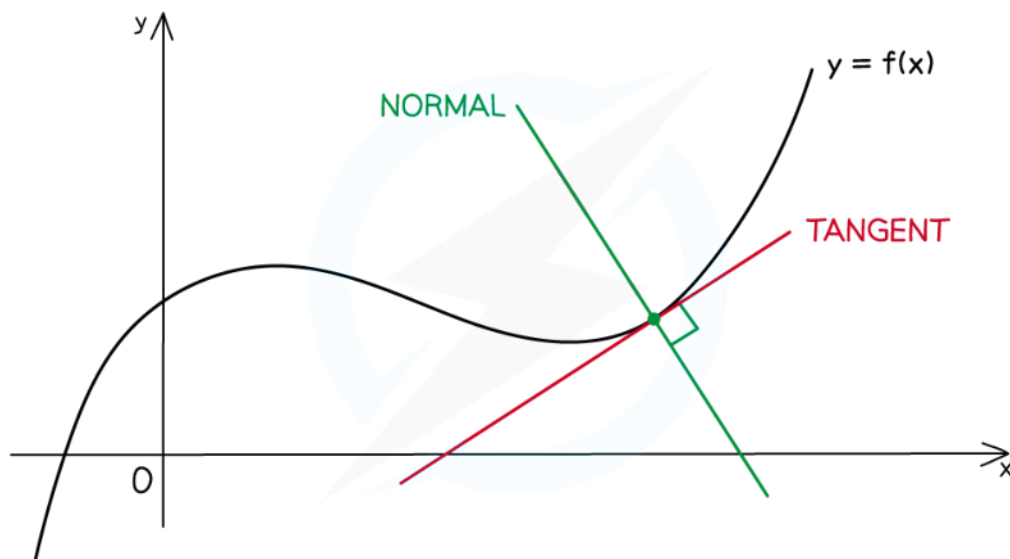
- To find the **equation of a straight line**, a **point** and the **gradient** are needed
- The **gradient**, m , of the **tangent** to the function $y = f(x)$ at (x_1, y_1) is $f'(x_1)$
- Therefore find the **equation** of the **tangent** to the function $y = f(x)$ at the point (x_1, y_1) by substituting the gradient, $f'(x_1)$, and point (x_1, y_1) into $y - y_1 = m(x - x_1)$, giving:
 - $y - y_1 = f'(x_1)(x - x_1)$
- (You could also substitute into $y = mx + c$ but it is usually quicker to substitute into $y - y_1 = m(x - x_1)$)

What is a normal?

- At any point on the graph of a (non-linear) function, the **normal** is the straight line that passes through that point and is **perpendicular** to the **tangent**



Your notes



Copyright © Save My Exams. All Rights Reserved

How do I find the equation of a normal?

- The **gradient** of the **normal** to the function $y = f(x)$ at (x_1, y_1) is $\frac{-1}{f'(x_1)}$
- Therefore find the **equation** of the **normal** to the function $y = f(x)$ at the point (x_1, y_1) by using

$$y - y_1 = \frac{-1}{f'(x_1)}(x - x_1)$$

Examiner Tip

- You are not given the formula for the equation of a tangent or the equation of a normal
- But both can be derived from the equations of a straight line which are given in the formula booklet



Your notes

Worked example

The function $f(x)$ is defined by

$$f(x) = 2x^4 + \frac{3}{x^2} \quad x \neq 0$$

- a) Find an equation for the tangent to the curve $y = f(x)$ at the point where $x = 1$, giving your answer in the form $y = mx + c$.

First find $f'(x)$ by differentiating

$$f(x) = 2x^4 + 3x^{-2} \quad \text{Rewrite as powers of } x$$

$$f'(x) = 8x^3 - 6x^{-3}$$

For a tangent, " $y - y_1 = f'(a)(x - x_1)$ "

$$\text{At } x=1, y = 2(1)^4 + \frac{3}{(1)^2} = 5$$

$$f'(1) = 8(1)^3 - \frac{6}{(1)^3} = 2$$

$$\therefore y - 5 = 2(x - 1)$$

Tangent at $x=1$, is $y = 2x + 3$

- b) Find an equation for the normal at the point where $x = 1$, giving your answer in the form $ax + by + d = 0$, where a , b and d are integers.



Your notes

For a normal, " $y - y_1 = \frac{-1}{f'(a)}(x - x_1)$ "

Using results from part a):

$$y - 5 = \frac{-1}{2}(x - 1)$$

$$y = -\frac{1}{2}x + \frac{11}{2}$$

$$2y = -x + 11$$

∴ Equation of normal is $x + 2y - 11 = 0$